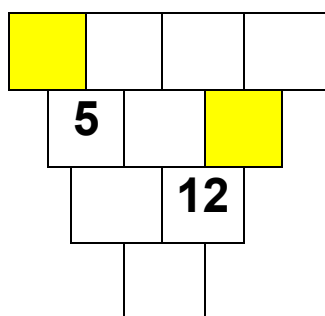
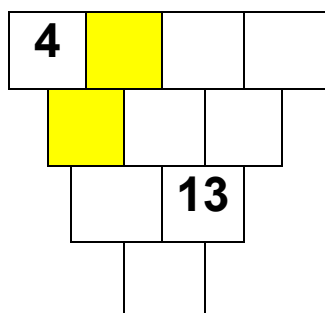


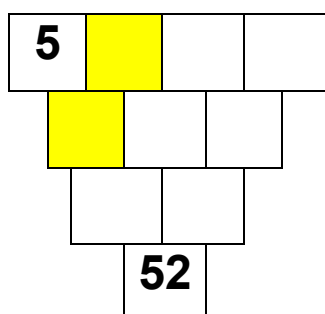
PYRAMIDY 2



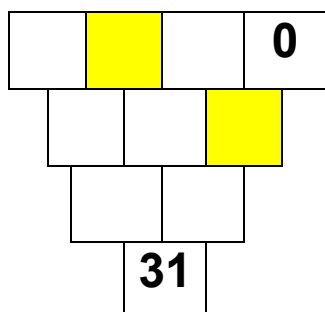
$$\square \cdot \square = 16$$



$$\square \cdot \square = 60$$



$$\square \cdot \square = 36$$



$$\square \cdot \square = 24$$